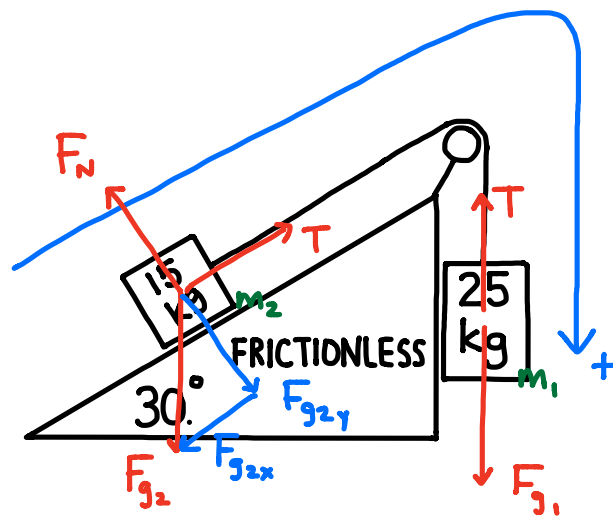


# MULTI-BODY SYSTEMS II - SOLUTIONS

I.



$$F_{g_{2x}} = F_{g_2} \sin 30^\circ = m_2 g \sin 30^\circ$$

$$F_{NET} = Ma$$

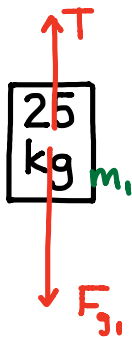
$$F_{g_1} - T + T - F_{g_{2x}} = (m_1 + m_2) a$$

$$m_1 g - m_2 g \sin 30^\circ = (m_1 + m_2) a$$

$$a = \frac{m_1 g - m_2 g \sin 30^\circ}{m_1 + m_2}$$

$$= \frac{(25)(9.8) - (15)(9.8) \sin 30^\circ}{25 + 15}$$

$$= 4.2875 \frac{m}{s^2} \rightarrow 4.3 \frac{m}{s^2} \text{ RIGHT}$$



$$F_{NET} = m_1 a$$

$$F_{g_1} - T = m_1 a$$

$$m_1 g - T = m_1 a$$

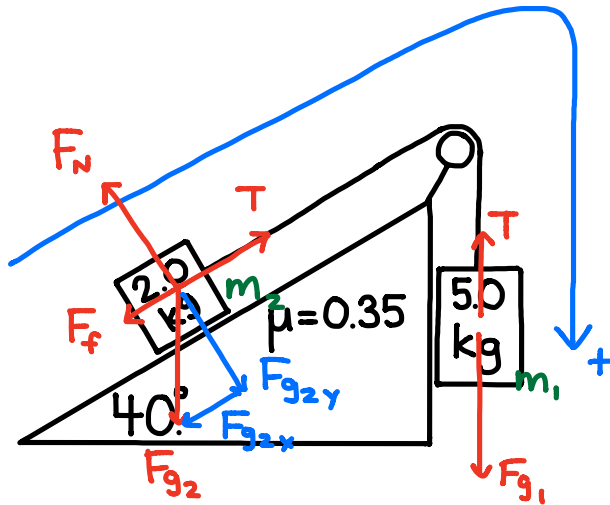
$$T = m_1 g - m_1 a$$

$$= m_1 (g - a)$$

$$= 25(9.8 - 4.2875)$$

$$= 140 \text{ N}$$

2.



$$F_{g2x} = F_{g2} \sin 40^\circ$$

$$= m_2 g \sin 40^\circ$$

$$F_{g2y} = F_{g2} \cos 40^\circ$$

$$= m_2 g \cos 40^\circ$$

$$F_N = F_{g2y}$$

$$= m_2 g \cos 40^\circ$$

$$F_{NET} = Ma$$

$$F_{g1} - \cancel{T} + \cancel{T} - F_{g2x} - F_f = (m_1 + m_2)a$$

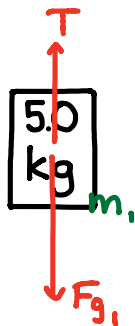
$$m_1 g - m_2 g \sin 40^\circ - \mu F_N = (m_1 + m_2)a$$

$$m_1 g - m_2 g \sin 40^\circ - \mu m_2 g \cos 40^\circ = (m_1 + m_2)a$$

$$a = \frac{m_1 g - m_2 g \sin 40^\circ - \mu m_2 g \cos 40^\circ}{m_1 + m_2}$$

$$= \frac{(5.0)(9.8) - (2.0)(9.8) \sin 40^\circ - (0.35)(2.0)(9.8) \cos 40^\circ}{5.0 + 2.0}$$

$$= 4.4495 \frac{m}{s^2} \rightarrow 4.4 \frac{m}{s^2} \text{ RIGHT}$$



$$F_{NET} = m_1 a$$

$$F_{g1} - T = m_1 a$$

$$m_1 g - T = m_1 a$$

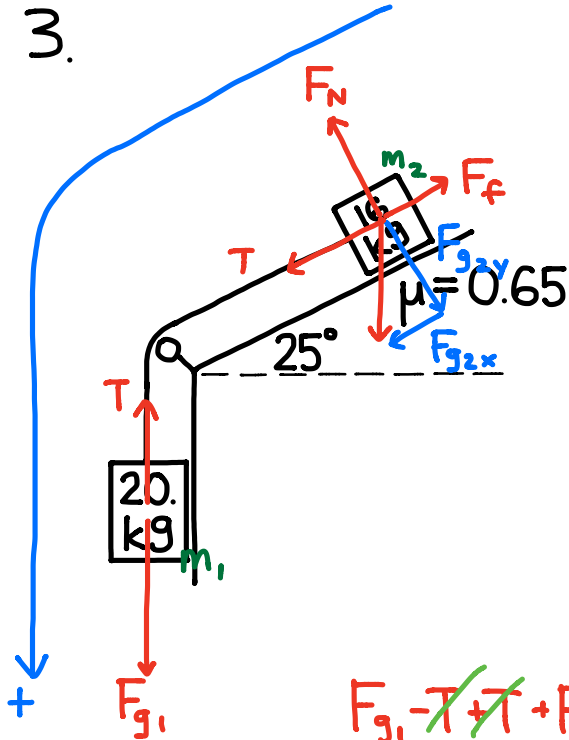
$$T = m_1 g - m_1 a$$

$$= m_1 (g - a)$$

$$= (5.0)(9.8 - 4.4495)$$

$$= 27 \text{ N}$$

3.



$$F_{g_{2x}} = F_{g_2} \sin 25^\circ = m_2 g \sin 25^\circ$$

$$F_{g_{2y}} = F_{g_2} \cos 25^\circ = m_2 g \cos 25^\circ$$

$$F_N = F_{g_{2y}} = m_2 g \cos 25^\circ$$

$$F_{NET} = Ma$$

$$F_{g_1} - T + T + F_{g_{2x}} - F_f = (m_1 + m_2)a$$

$$m_1 g + m_2 g \sin 25^\circ - \mu F_N = (m_1 + m_2)a$$

$$m_1 g + m_2 g \sin 25^\circ - \mu m_2 g \cos 25^\circ = (m_1 + m_2)a$$

$$a = \frac{m_1 g + m_2 g \sin 25^\circ - \mu m_2 g \cos 25^\circ}{m_1 + m_2}$$

$$= \frac{(20)(9.8) + (16)(9.8) \sin 25^\circ - (0.65)(16)(9.8) \cos 25^\circ}{20 + 16}$$

$$= 4.7913 \frac{m}{s^2} \rightarrow 4.7 \frac{m}{s^2} \text{ LEFT}$$



$$F_{NET} = m_1 a$$

$$F_{g_1} - T = m_1 a$$

$$m_1 g - T = m_1 a$$

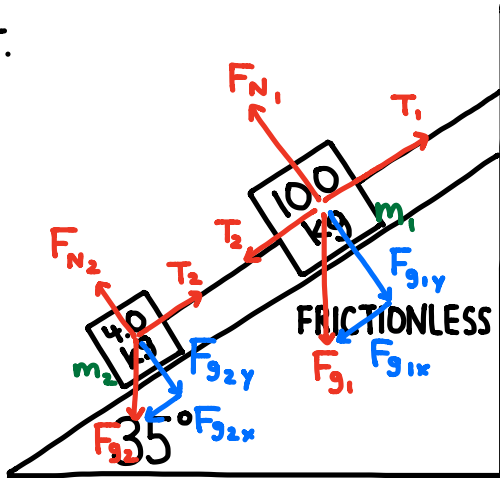
$$T = m_1 g - m_1 a$$

$$= m_1 (g - a)$$

$$= (20)(9.8 - 4.7913)$$

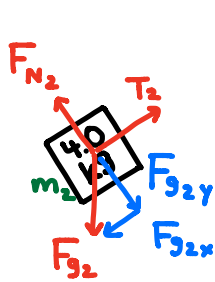
$$= 102 \text{ N} \rightarrow 1.0 \times 10^2 \text{ N}$$

4.



$$F_{g1x} = F_{g1} \sin 35^\circ = m_1 g \sin 35^\circ$$

$$F_{g2x} = F_{g2} \sin 35^\circ = m_2 g \sin 35^\circ$$



$$F_{NET} = m_2 a \quad a=0$$

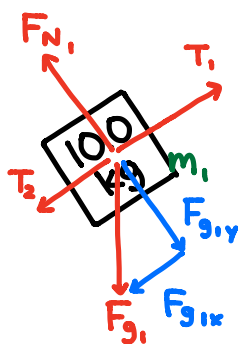
$$T_2 - F_{g2x} = 0$$

$$T_2 = F_{g2x}$$

$$= m_2 g \sin 35^\circ$$

$$= (4.0)(9.8) \sin 35^\circ$$

$$= 22.4842 \text{ N} \rightarrow 22 \text{ N}$$



$$F_{NET} = m_1 a \quad a=0$$

$$T_1 - T_2 - F_{g1x} = 0$$

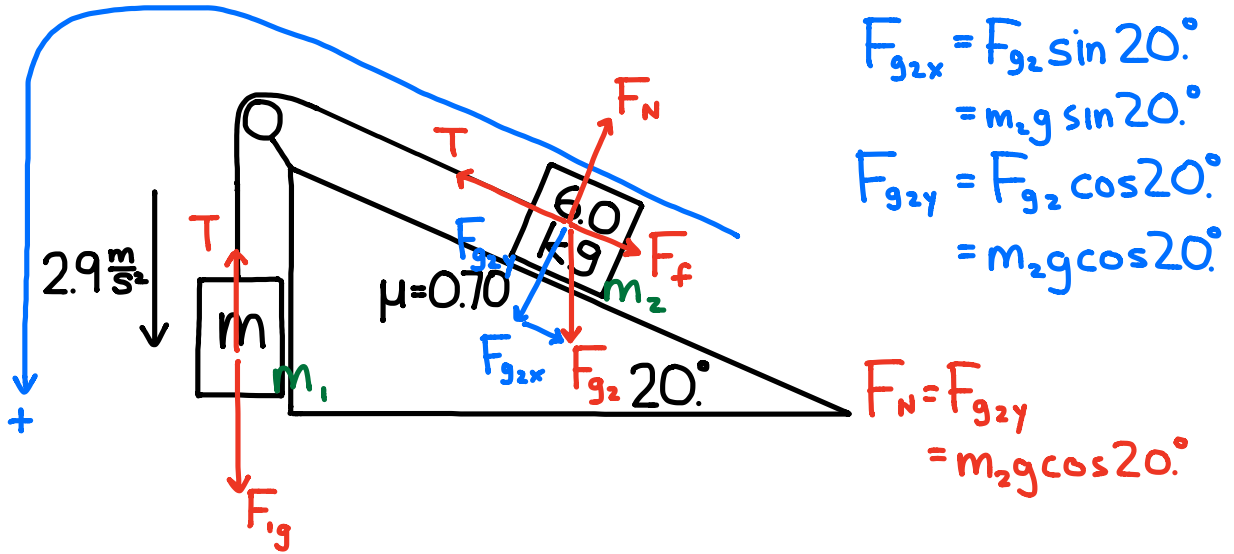
$$T_1 = T_2 + F_{g1x}$$

$$= T_2 + m_1 g \sin 35^\circ$$

$$= 22.4842 + (10.0)(9.8) \sin 35^\circ$$

$$= 79 \text{ N}$$

5.



$$F_{N \neq T} = M a$$

$$F_{g1} - \cancel{T} + \cancel{T} - F_{g2x} - F_f = (m_1 + m_2) a$$

$$m_1 g - m_2 g \sin 20^\circ - \mu F_N = m_1 a + m_2 a$$

$$m_1 g - m_2 g \sin 20^\circ - \mu m_2 g \cos 20^\circ = m_1 a + m_2 a$$

$$m_1 g - m_1 a = m_2 a + m_2 g \sin 20^\circ + \mu m_2 g \cos 20^\circ$$

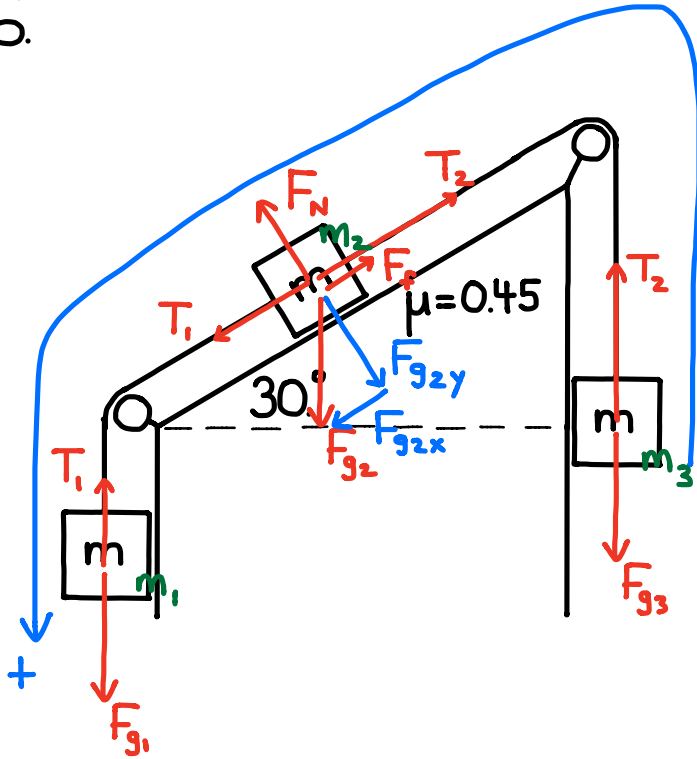
$$m_1 (g - a) = m_2 (a + g \sin 20^\circ + \mu g \cos 20^\circ)$$

$$m_1 = \frac{a + g \sin 20^\circ + \mu g \cos 20^\circ}{g - a} m_2$$

$$= \frac{2.9 + 9.8 \sin 20^\circ + (0.70)(9.8) \cos 20^\circ}{9.8 - 2.9} \cdot 6.0$$

$$= 11 \text{ kg}$$

6.



$$F_{g2x} = F_{g2} \sin 30^\circ = mg \sin 30^\circ$$

$$F_{g2y} = F_{g2} \cos 30^\circ = mg \cos 30^\circ$$

$$F_N = F_{g2y} = mg \cos 30^\circ$$

$$F_{NET} = Ma$$

$$F_{g1} - T_1 + T_1 + F_{g2x} - F_f - T_2 + T_2 - F_{g3} = 3ma$$

$$mg + mg \sin 30^\circ - \mu F_N - mg = 3ma$$

$$mg \sin 30^\circ - \mu mg \cos 30^\circ = 3ma$$

$$a = \frac{g \sin 30^\circ - \mu g \cos 30^\circ}{3}$$

$$= \frac{\sin 30^\circ - \mu \cos 30^\circ}{3} g$$

$$= \frac{\sin 30^\circ - (0.45) \cos 30^\circ}{3} 9.8$$

$$= 0.36 \frac{m}{s^2} \text{ LEFT}$$